



Province of the
EASTERN CAPE
EDUCATION

**NATIONAL
SENIOR CERTIFICATE**

GRADE 11

NOVEMBER 2020

**PHYSICAL SCIENCES P2
(CHEMISTRY)
EXEMPLAR**

MARKS: 150

TIME: 3 hours



This question paper consists of 18 pages, including 4 data sheets.

INSTRUCTIONS AND INFORMATION

1. Write your full NAME and SURNAME in the appropriate spaces on the ANSWER BOOK.
2. This question paper consists of TEN questions. Answer ALL the questions in the ANSWER BOOK.
3. Start EACH question on a NEW page in the ANSWER BOOK.
4. Number the answers correctly according to the numbering system used in this question paper.
5. Leave ONE line between two subquestions, for example between QUESTION 2.1 and QUESTION 2.2.
6. You may use a non-programmable calculator.
7. You may use appropriate mathematical instruments.
8. Show ALL formulae and substitutions in ALL calculations.
9. Round off your FINAL numerical answers to a minimum of TWO decimal places.
10. Give brief motivations, discussions, et cetera where required
11. You are advised to use the attached DATA SHEETS.
12. Write neatly and legibly.

QUESTION 1: MULTIPLE-CHOICE QUESTIONS

Various options are provided as possible answers to the following questions. Choose the answer and write only the letter (A–D), next to the question numbers (1.1 to 1.10) in the ANSWER BOOK, for example 1.11 D.

- 1.1 The distance between the nuclei of two adjacent atoms when atoms bond is called ...
- A bond length.
 - B bond energy.
 - C interatomic bond.
 - D intermolecular forces. (2)
- 1.2 Which ONE of the following substances has ION-DIPOLE forces?
- A $\text{H}_2\text{O} (\ell)$
 - B $\text{CO}_2 (\text{g})$
 - C $\text{NaCl} (\text{aq})$
 - D $\text{NaCl} (\text{s})$ (2)
- 1.3 The geometrical shape of the PCl_5 molecule according to VSEPR theory is ...
- A linear.
 - B trigonal planar.
 - C tetrahedral.
 - D trigonal bipyramidal. (2)
- 1.4 ONE mole of water (H_2O) and ONE mole of carbon dioxide (CO_2) will have the same...
- A mass.
 - B molar mass.
 - C number of molecules.
 - D density. (2)

1.5 A certain mass of oxygen is sealed in a syringe. The gas exerts a pressure p . If both the volume and the temperature are doubled, the new pressure of the gas will be ...

A p

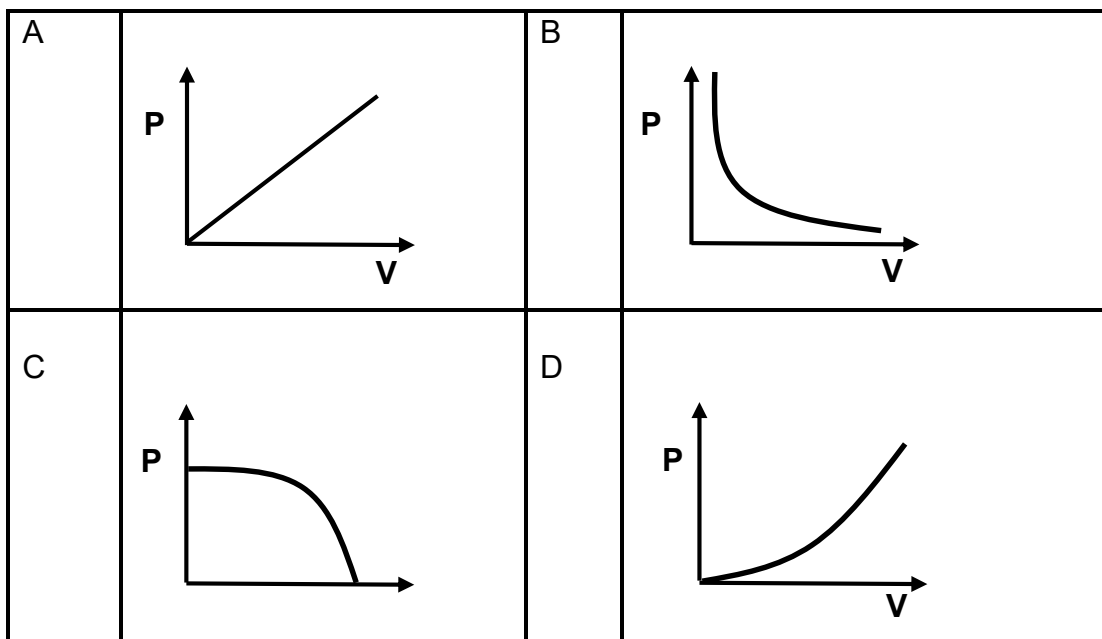
B $\frac{1}{2}p$

C $2p$

D $4p$

(2)

1.6 The relationship between pressure and volume of a fixed amount of gas at constant temperature is BEST described by ...



(2)

1.7 Equal masses of each of the following gases He, O₂, CH₄ and N₂ are placed in separate containers at the same temperature and pressure.

Which ONE of the gases will have the LARGEST volume?

A He

B O₂

C CH₄

D N₂

(2)

1.8 Consider the reaction:



X represents ...

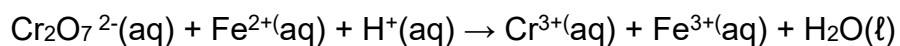
- A H₂O acting as an acid.
- B H₂O acting as a base.
- C H₃O⁺ acting as an acid.
- D H₃O⁺ acting as a base. (2)

1.9 Consider the pairs of reactants given below.

Which ONE of the following pairs of reactants will produce a salt, water and carbon dioxide?

- A Zn + H₂SO₄
- B NaOH + HCl
- C CuO + H₂SO₄
- D Na₂CO₃ + HCl (2)

1.10 Consider the following redox reaction:

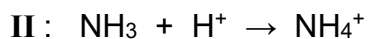
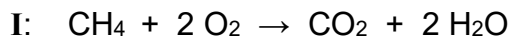


The product of the reduction half reaction in the equation is ...

- A Fe³⁺
 - B Cr³⁺
 - C H₂O
 - D H⁺ (2)
- [20]**

QUESTION 2 (Start on a NEW page.)

Consider the following chemical equations:



2.1 Define the term *covalent bond*. (2)

2.2 Write down the Lewis structure for the CH_4 molecule. (2)

2.3 Consider the bonds C – H and O – H

Which bond ...

2.3.1 has a longer bond length? Give a reason for your answer. (2)

2.3.2 is stronger? (1)

2.4 How many lone pairs of electrons are in the central atom of the H_2O molecule? (1)

2.5 Write down the formula of a substance in reaction **II** that has a dative covalent bond. (1)

2.6 The NH_3 molecule is POLAR but the CH_4 molecule is NON-POLAR.

Explain this observation. (4)

[13]

QUESTION 3 (Start on a NEW page.)

3.1 The boiling points in the table below were obtained during an investigation carried out to compare the boiling points of group 7 hydrides. The hydrides, HCl and HBr, are labelled in the table as compounds **A** and **B** respectively.

Compound		Molecular mass (g.mol ⁻¹)	Boiling point (°C)
A	HCl	36,6	- 85
B	HBr	81	- 66

3.1.1 Define the term *boiling point*. (2)

3.1.2 In what phase are compounds (**A** and **B**) at 0 °C and 101 kPa of external pressure? (1)

3.1.3 Name the type of intermolecular force that exists between molecules of both compounds **A** and **B** due to the polar nature of these molecules. (1)

3.1.4 Which ONE of the compounds (**A** or **B**), has STRONGER London forces (dispersion forces)?

Give a reason for your answer. (3)

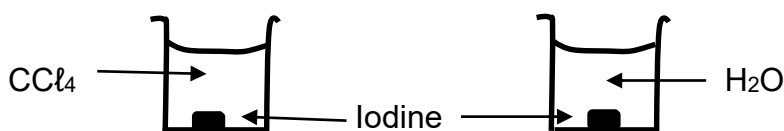
3.1.5 Which compound (**A** or **B**), will have the higher vapour pressure?

Give a reason for the answer by referring to the data in the table. (2)

Compound **C** (HF), not shown in the table, has a smaller molecular size than both compounds **A** and **B** but has a relatively higher boiling point of 19,5 °C.

3.1.6 Explain why the boiling point of compound **C** is HIGHER than that of compounds **A** and **B** by referring to the TYPE and STRENGTH of intermolecular forces involved. (3)

3.2 Solid iodine (I₂) is added to equal volumes of carbon tetrachloride (CCl₄) and water in separate test tubes as shown in the diagram below.



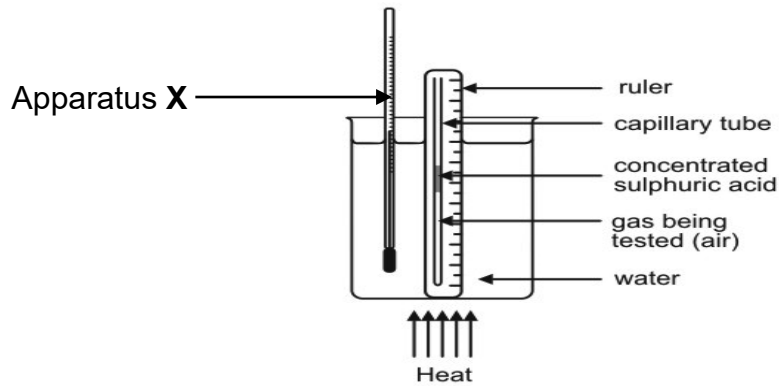
3.2.1 In which liquid (CCl₄ or H₂O), will the iodine dissolve? (1)

3.2.2 Explain the answer to QUESTION 3.2.1 above by referring to the intermolecular forces involved.

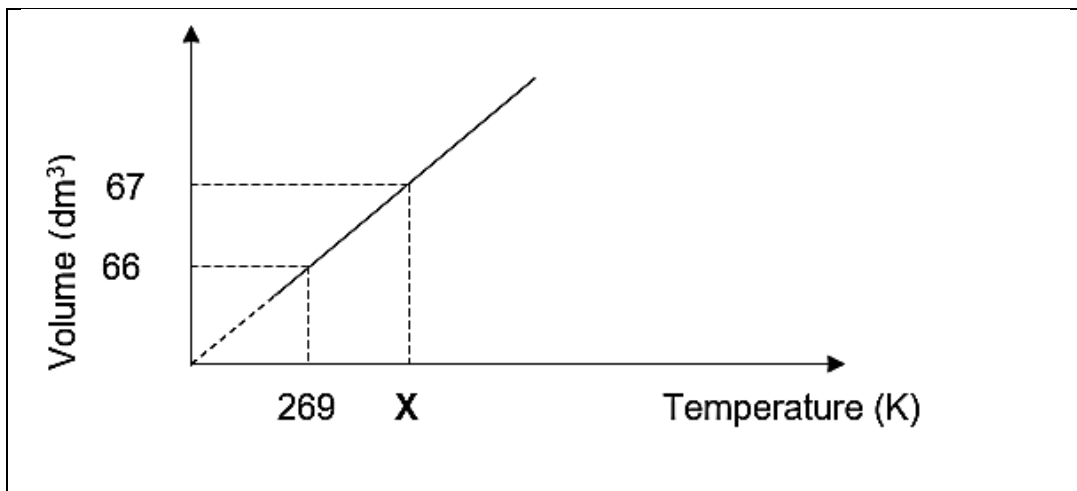
(3)
[16]

QUESTION 4 (Start on a NEW page.)

Grade 11 learners want to verify the relationship between temperature and volume of a gas. They used the following experimental set-up.



- 4.1 Write down the name of the gas law that is investigated. (1)
- 4.2 For this investigation write down the:
- 4.2.1 Investigative question (2)
- 4.2.2 Controlled variable (1)
- 4.3 Write down the name of apparatus X. (1)
- 4.4 The learners plot the results of their investigation on the graph below:



- 4.4.1 Determine, by calculation, the value of X. (4)
- 132 g of CO₂ gas was used in the above investigation.
- 4.4.2 Calculate the pressure of the gas at 269 K. (5)

4.5 Write down the TWO conditions of temperature and pressure at which real gases deviate from the ideal gas behaviour. (2)

4.6 The CO₂ used in the investigation is replaced with an equal amount of H₂ (g).

Which gas (CO₂ or H₂) behaves more closely to an ideal gas?

Give TWO reasons for your answer.

(3)
[19]

QUESTION 5 (Start on a NEW page.)

Learners study ENDOTHERMIC and EXOTHERMIC reactions by conducting experiments I and II in which the reactions shown in the table below take place.

EXPERIMENT	BALANCED EQUATION
I	$2 \text{H}_2\text{O}_2 (\ell) \rightarrow 2 \text{H}_2\text{O} (\ell) + \text{O}_2(\text{g})$
II	$2 \text{H}_2\text{O} (\ell) \rightarrow 2 \text{H}_2(\text{g}) + \text{O}_2(\text{g})$

The learners measured the initial and final temperatures of the reaction mixtures. They also obtained activation energies for the reactions from a data table.

The learners represented their findings in a table as shown below.

EXPERIMENT	Initial (°C)	Final (°C)	Activation energy (kJ/mol)
I	24	36	75
II	24	18	237

- 5.1 Define the term *activation energy*. (2)
- 5.2 In which experiment (I or II) is the reaction EXOTHERMIC?
Explain your answer. (2)
- 5.3 Is the heat of the reaction, ΔH , POSITIVE or NEGATIVE for an EXOTHERMIC reaction? (1)
- 5.4 Write down the general name of a substance that can be added to the reaction mixture in experiment II to reduce the activation energy. (1)
- 5.5 Both reactions produce the same number of moles of oxygen gas.
How does the mass of H_2O_2 used in experiment I compare to the mass of H_2O used in experiment II?
Write down only SMALLER THAN, LARGER THAN or THE SAME. (2)

5.6 Draw a potential energy versus time graph for the reaction in experiment II.

The following must be shown on the graph.

- Heat of the reaction (ΔH)
- Activation energy (E_a)

(3)
[11]

QUESTION 6 (Start on a NEW page.)

6.1 Methyl propanoate is an organic compound with the following percentage composition:

54,55% C ; 9,09% H ; 36,36% O

The molar mass of the compound is $88 \text{ g}\cdot\text{mol}^{-1}$.

6.1.1 Define the term *empirical formula*. (2)

6.1.2 Determine, by calculation, the empirical formula. (6)

6.1.3 Determine the molecular formula. (2)

6.2 Learners prepare a solution of sodium hydroxide (NaOH) in water by placing 8 g of sodium hydroxide (NaOH) in a volumetric flask and adding water to produce 250 cm^3 of solution after stirring.

6.2.1 Define *concentration* in words. (2)

6.2.2 Calculate the concentration of the sodium hydroxide (NaOH) solution. (4)

6.3 Sodium azide (NaN_3) is used in car airbags. For the airbag to inflate the following reaction must take place:



Calculate the volume of nitrogen gas (N_2) that would be produced at STP if 55 g of sodium azide reacts completely.

(5)
[21]

QUESTION 7 (Start on a NEW page.)

The fertiliser ammonium sulphate ((NH₄)₂SO₄) is produced from the reaction of sulphuric acid (H₂SO₄) and ammonia (NH₃) according to the balanced equation:




2 kg of sulphuric acid and 58,82 moles of ammonia are available to produce the fertiliser.

7.1 Define the term *limiting reagent*. (2)

7.2 Calculate the maximum mass of ammonium sulphate that can be produced by the reaction. (7)
[9]

QUESTION 8 (Start on a NEW page.)

8.1 Consider the chemical reaction below:



8.1.1 Define a *base* according to a Lowry-Bronsted theory. (2)

8.1.2 Write down ONE conjugate acid-base pair in the equation. (1)

8.1.3 Is the reaction mixture ACIDIC or ALKALINE at the completion of the reaction? Give a reason for your answer. (2)

8.1.4 Write down the formula of a substance in the reaction, other than H₂O, that can act as an ampholyte in some reactions. (2)

8.2 Copper (II) oxide (CuO) reacts with nitric acid.

Write down a balanced equation for the reaction. (3)

8.3 40 g of IMPURE calcium carbonate reacts with a 200 cm³ of a dilute sulphuric acid with a concentration of 1,5 mol·dm⁻³. All the calcium carbonate and sulphuric acid react completely leaving the impurities unreacted at the completion of the reaction.




8.3.1 Calculate the percentage purity of the calcium carbonate. (6)

To obtain the sulphuric acid solution of concentration 1,5 mol·dm⁻³ that reacted with the IMPURE calcium carbonate, 10 cm³ of a concentrated sulphuric acid solution of concentration 9 mol·dm⁻³ was added to water.

8.3.2 Calculate the volume of water required to dilute the concentrated sulphuric acid solution to a concentration of 1,5 mol·dm⁻³. (4)
[20]

QUESTION 9 (Start on a NEW page.)

9.1 Consider the redox reaction given below.




9.1.1 Define *oxidation reaction* in terms of electron transfer. (2)

Write down the:

9.1.2 Formula of the reducing agent (2)

9.1.3 Reduction half reaction (2)

9.2 Consider the redox reaction below:



9.2.1 Determine the oxidation number of nitrogen (N) in NO_3^- . (2)

9.2.2 Balance the above chemical equation using the ion-electron method. (4)


[12]

QUESTION 10 (Start on a NEW page.)

10.1 The mining industry contributes towards the South African economy. Gold is one of the minerals that is being mined in South Africa.

10.1.1 Write down the name of the location of the major mining activity in South Africa. (1)

The following chemical reaction occurs during the final steps in the recovery process of gold.



10.1.2 Is gold OXIDISED or REDUCED during the reaction?

Explain the answer by referring to the oxidation number. (3)

10.1.3 The NaCN is one of the products formed in the reaction.

Give a reason why chemists MUST ensure that NaCN does not find its way to nearby water sources. (2)

10.1.4 Write down the name of the process that is followed after this reaction. (1)

10.2 The burning of fossil fuels has a negative impact on the environment.

Write down TWO negative impacts of the large-scale burning of fossil fuels. (2)
[9]

TOTAL: 150

**NATIONAL SENIOR CERTIFICATE
NASIONALE SENIOR SERTIFIKAAT**

**DATA FOR PHYSICAL SCIENCES GRADE 11
PAPER 2 (CHEMISTRY)**

**GEGEWENS VIR FISIESTE WETENSKAPPE GRAAD 11
VRAESTEL 2 (CHEMIE)**

TABLE 1: PHYSICAL CONSTANTS/TABEL 1: FISIESTE KONSTANTES

NAAM/NAME	SIMBOOL/SYMBOL	WAARDE/VALUE
Standard pressure <i>Standaarddruk</i>	p^θ	$1,013 \times 10^5 \text{ Pa}$
Molar gas volume at STP <i>Molêre gasvolume teen STD</i>	V_m	$22,4 \text{ dm}^3 \cdot \text{mol}^{-1}$
Standard temperature <i>Standaardtemperatuur</i>	T^θ	273 K
Charge on electron <i>Lading op elektron</i>	e	$-1,6 \times 10^{-19} \text{ C}$
Avogadro's constant <i>Avogadro se konstante</i>	N_A	$6,02 \times 10^{23} \text{ mol}^{-1}$

TABLE 2: FORMULAE/TABEL 2: FORMULES

$n = \frac{m}{M}$ or/of $n = \frac{N}{N_A}$ or/of $n = \frac{V}{V_m}$	$c = \frac{n}{V}$ or/of $c = \frac{m}{MV}$ $\frac{c_a V_a}{c_b V_b} = \frac{n_a}{n_b}$	$\text{pH} = -\log[\text{H}_3\text{O}^+]$ $K_w = [\text{H}_3\text{O}^+][\text{OH}^-] = 1 \times 10^{-14}$ at /by 298K
$E^\theta_{\text{cell}} = E^\theta_{\text{cathode}} - E^\theta_{\text{anode}} / E^\theta_{\text{sel}} = E^\theta_{\text{katode}} - E^\theta_{\text{anode}}$		
$E^\theta_{\text{cell}} = E^\theta_{\text{reduction}} - E^\theta_{\text{oxidation}} / E^\theta_{\text{sel}} = E^\theta_{\text{reduksie}} - E^\theta_{\text{oksidasie}}$		
$E^\theta_{\text{cell}} = E^\theta_{\text{oxidising agent}} - E^\theta_{\text{reducing agent}} / E^\theta_{\text{sel}} = E^\theta_{\text{oksideermiddel}} - E^\theta_{\text{reduseermiddel}}$		

TABLE 3: THE PERIODIC TABLE OF ELEMENTS/TABEL 3: DIE PERIODIEKE TABEL VAN ELEMENTE

1	2	3	4	5	6	7	8	9	10	11	12	13	14	15	16	17	18		
(I)	(II)	KEY/ SLEUTEL																(VIII)	
		Atoomgetal Atomic number																	
1 H 1	2 He 4																	18 Ar 40	
3 Li 7	4 Be 9																	17 Cl 35,5	19 K 39
11 Na 23	12 Mg 24																	16 S 32	20 Ca 40
19 K 39	20 Ca 40	21 Sc 45	22 Ti 48	23 V 51	24 Cr 52	25 Mn 55	26 Fe 56	27 Co 59	28 Ni 59	29 Cu 63,5	30 Zn 65	31 Ga 70	32 Ge 73	33 As 75	34 Se 79	35 Br 80	36 Kr 84		
37 Rb 86	38 Sr 88	39 Y 89	40 Zr 91	41 Nb 92	42 Mo 96	43 Tc 99	44 Ru 101	45 Rh 103	46 Pd 106	47 Ag 108	48 Cd 112	49 In 115	50 Sn 119	51 Sb 122	52 Te 128	53 I 127	54 Xe 131		
55 Cs 133	56 Ba 137	57 La 139	72 Hf 179	73 Ta 181	74 W 184	75 Re 186	76 Os 190	77 Ir 192	78 Pt 195	79 Au 197	80 Hg 201	81 Tl 204	82 Pb 207	83 Bi 209	84 Po 209	85 At 210	86 Rn 222		
87 Fr 226	88 Ra 226	89 Ac																103 Lr	
		Elektronegatiwiteit Electronegativity																	
		Benaderde relatiewe atoommassa Approximate relative atomic mass																	
		Atoomgetal Atomic number																	
		Simbool Symbol																	

58 Ce 140	59 Pr 141	60 Nd 144	61 Pm	62 Sm 150	63 Eu 152	64 Gd 157	65 Tb 159	66 Dy 163	67 Ho 165	68 Er 167	69 Tm 169	70 Yb 173	71 Lu 175
90 Th 232	91 Pa 231	92 U 238	93 Np	94 Pu	95 Am	96 Cm	97 Bk	98 Cf	99 Es	100 Fm	101 Md	102 No	103 Lr

TABLE 4A: STANDARD REDUCTION POTENTIALS
 TABEL 4A: STANDAARD REDUKSIEPOTENSIALE

Half-reactions/Halfreaksies	E^{θ} (V)
$F_2(g) + 2e^- \rightleftharpoons 2F^-$	+ 2,87
$Co^{3+} + e^- \rightleftharpoons Co^{2+}$	+ 1,81
$H_2O_2 + 2H^+ + 2e^- \rightleftharpoons 2H_2O$	+1,77
$MnO_4^- + 8H^+ + 5e^- \rightleftharpoons Mn^{2+} + 4H_2O$	+ 1,51
$Cl_2(g) + 2e^- \rightleftharpoons 2Cl^-$	+ 1,36
$Cr_2O_7^{2-} + 14H^+ + 6e^- \rightleftharpoons 2Cr^{3+} + 7H_2O$	+ 1,33
$O_2(g) + 4H^+ + 4e^- \rightleftharpoons 2H_2O$	+ 1,23
$MnO_2 + 4H^+ + 2e^- \rightleftharpoons Mn^{2+} + 2H_2O$	+ 1,23
$Pt^{2+} + 2e^- \rightleftharpoons Pt$	+ 1,20
$Br_2(l) + 2e^- \rightleftharpoons 2Br^-$	+ 1,07
$NO_3^- + 4H^+ + 3e^- \rightleftharpoons NO(g) + 2H_2O$	+ 0,96
$Hg^{2+} + 2e^- \rightleftharpoons Hg(l)$	+ 0,85
$Ag^+ + e^- \rightleftharpoons Ag$	+ 0,80
$NO_3^- + 2H^+ + e^- \rightleftharpoons NO_2(g) + H_2O$	+ 0,80
$Fe^{3+} + e^- \rightleftharpoons Fe^{2+}$	+ 0,77
$O_2(g) + 2H^+ + 2e^- \rightleftharpoons H_2O_2$	+ 0,68
$I_2 + 2e^- \rightleftharpoons 2I^-$	+ 0,54
$Cu^+ + e^- \rightleftharpoons Cu$	+ 0,52
$SO_2 + 4H^+ + 4e^- \rightleftharpoons S + 2H_2O$	+ 0,45
$2H_2O + O_2 + 4e^- \rightleftharpoons 4OH^-$	+ 0,40
$Cu^{2+} + 2e^- \rightleftharpoons Cu$	+ 0,34
$SO_4^{2-} + 4H^+ + 2e^- \rightleftharpoons SO_2(g) + 2H_2O$	+ 0,17
$Cu^{2+} + e^- \rightleftharpoons Cu^+$	+ 0,16
$Sn^{4+} + 2e^- \rightleftharpoons Sn^{2+}$	+ 0,15
$S + 2H^+ + 2e^- \rightleftharpoons H_2S(g)$	+ 0,14
$2H^+ + 2e^- \rightleftharpoons H_2(g)$	0,00
$Fe^{3+} + 3e^- \rightleftharpoons Fe$	- 0,06
$Pb^{2+} + 2e^- \rightleftharpoons Pb$	- 0,13
$Sn^{2+} + 2e^- \rightleftharpoons Sn$	- 0,14
$Ni^{2+} + 2e^- \rightleftharpoons Ni$	- 0,27
$Co^{2+} + 2e^- \rightleftharpoons Co$	- 0,28
$Cd^{2+} + 2e^- \rightleftharpoons Cd$	- 0,40
$Cr^{3+} + e^- \rightleftharpoons Cr^{2+}$	- 0,41
$Fe^{2+} + 2e^- \rightleftharpoons Fe$	- 0,44
$Cr^{3+} + 3e^- \rightleftharpoons Cr$	- 0,74
$Zn^{2+} + 2e^- \rightleftharpoons Zn$	- 0,76
$2H_2O + 2e^- \rightleftharpoons H_2(g) + 2OH^-$	- 0,83
$Cr^{2+} + 2e^- \rightleftharpoons Cr$	- 0,91
$Mn^{2+} + 2e^- \rightleftharpoons Mn$	- 1,18
$Al^{3+} + 3e^- \rightleftharpoons Al$	- 1,66
$Mg^{2+} + 2e^- \rightleftharpoons Mg$	- 2,36
$Na^+ + e^- \rightleftharpoons Na$	- 2,71
$Ca^{2+} + 2e^- \rightleftharpoons Ca$	- 2,87
$Sr^{2+} + 2e^- \rightleftharpoons Sr$	- 2,89
$Ba^{2+} + 2e^- \rightleftharpoons Ba$	- 2,90
$Cs^+ + e^- \rightleftharpoons Cs$	- 2,92
$K^+ + e^- \rightleftharpoons K$	- 2,93
$Li^+ + e^- \rightleftharpoons Li$	- 3,05

Increasing oxidising ability/Toenemende oksiderende vermoë

Increasing reducing ability/Toenemende reduserende vermoë

TABLE 4B: STANDARD REDUCTION POTENTIALS
 TABEL 4B: STANDAARD REDUKSIEPOTENSIALE

Half-reactions/Halfreaksies	E^{θ} (V)
$\text{Li}^+ + \text{e}^- \rightleftharpoons \text{Li}$	-3,05
$\text{K}^+ + \text{e}^- \rightleftharpoons \text{K}$	-2,93
$\text{Cs}^+ + \text{e}^- \rightleftharpoons \text{Cs}$	-2,92
$\text{Ba}^{2+} + 2\text{e}^- \rightleftharpoons \text{Ba}$	-2,90
$\text{Sr}^{2+} + 2\text{e}^- \rightleftharpoons \text{Sr}$	-2,89
$\text{Ca}^{2+} + 2\text{e}^- \rightleftharpoons \text{Ca}$	-2,87
$\text{Na}^+ + \text{e}^- \rightleftharpoons \text{Na}$	-2,71
$\text{Mg}^{2+} + 2\text{e}^- \rightleftharpoons \text{Mg}$	-2,36
$\text{Al}^{3+} + 3\text{e}^- \rightleftharpoons \text{Al}$	-1,66
$\text{Mn}^{2+} + 2\text{e}^- \rightleftharpoons \text{Mn}$	-1,18
$\text{Cr}^{2+} + 2\text{e}^- \rightleftharpoons \text{Cr}$	-0,91
$2\text{H}_2\text{O} + 2\text{e}^- \rightleftharpoons \text{H}_2(\text{g}) + 2\text{OH}^-$	-0,83
$\text{Zn}^{2+} + 2\text{e}^- \rightleftharpoons \text{Zn}$	-0,76
$\text{Cr}^{3+} + 3\text{e}^- \rightleftharpoons \text{Cr}$	-0,74
$\text{Fe}^{2+} + 2\text{e}^- \rightleftharpoons \text{Fe}$	-0,44
$\text{Cr}^{3+} + \text{e}^- \rightleftharpoons \text{Cr}^{2+}$	-0,41
$\text{Cd}^{2+} + 2\text{e}^- \rightleftharpoons \text{Cd}$	-0,40
$\text{Co}^{2+} + 2\text{e}^- \rightleftharpoons \text{Co}$	-0,28
$\text{Ni}^{2+} + 2\text{e}^- \rightleftharpoons \text{Ni}$	-0,27
$\text{Sn}^{2+} + 2\text{e}^- \rightleftharpoons \text{Sn}$	-0,14
$\text{Pb}^{2+} + 2\text{e}^- \rightleftharpoons \text{Pb}$	-0,13
$\text{Fe}^{3+} + 3\text{e}^- \rightleftharpoons \text{Fe}$	-0,06
$2\text{H}^+ + 2\text{e}^- \rightleftharpoons \text{H}_2(\text{g})$	0,00
$\text{S} + 2\text{H}^+ + 2\text{e}^- \rightleftharpoons \text{H}_2\text{S}(\text{g})$	+0,14
$\text{Sn}^{4+} + 2\text{e}^- \rightleftharpoons \text{Sn}^{2+}$	+0,15
$\text{Cu}^{2+} + \text{e}^- \rightleftharpoons \text{Cu}^+$	+0,16
$\text{SO}_4^{2-} + 4\text{H}^+ + 2\text{e}^- \rightleftharpoons \text{SO}_2(\text{g}) + 2\text{H}_2\text{O}$	+0,17
$\text{Cu}^{2+} + 2\text{e}^- \rightleftharpoons \text{Cu}$	+0,34
$2\text{H}_2\text{O} + \text{O}_2 + 4\text{e}^- \rightleftharpoons 4\text{OH}^-$	+0,40
$\text{SO}_2 + 4\text{H}^+ + 4\text{e}^- \rightleftharpoons \text{S} + 2\text{H}_2\text{O}$	+0,45
$\text{Cu}^+ + \text{e}^- \rightleftharpoons \text{Cu}$	+0,52
$\text{I}_2 + 2\text{e}^- \rightleftharpoons 2\text{I}^-$	+0,54
$\text{O}_2(\text{g}) + 2\text{H}^+ + 2\text{e}^- \rightleftharpoons \text{H}_2\text{O}_2$	+0,68
$\text{Fe}^{3+} + \text{e}^- \rightleftharpoons \text{Fe}^{2+}$	+0,77
$\text{NO}_3^- + 2\text{H}^+ + \text{e}^- \rightleftharpoons \text{NO}_2(\text{g}) + \text{H}_2\text{O}$	+0,80
$\text{Ag}^+ + \text{e}^- \rightleftharpoons \text{Ag}$	+0,80
$\text{Hg}^{2+} + 2\text{e}^- \rightleftharpoons \text{Hg}(\ell)$	+0,85
$\text{NO}_3^- + 4\text{H}^+ + 3\text{e}^- \rightleftharpoons \text{NO}(\text{g}) + 2\text{H}_2\text{O}$	+0,96
$\text{Br}_2(\ell) + 2\text{e}^- \rightleftharpoons 2\text{Br}^-$	+1,07
$\text{Pt}^{2+} + 2\text{e}^- \rightleftharpoons \text{Pt}$	+1,20
$\text{MnO}_2 + 4\text{H}^+ + 2\text{e}^- \rightleftharpoons \text{Mn}^{2+} + 2\text{H}_2\text{O}$	+1,23
$\text{O}_2(\text{g}) + 4\text{H}^+ + 4\text{e}^- \rightleftharpoons 2\text{H}_2\text{O}$	+1,23
$\text{Cr}_2\text{O}_7^{2-} + 14\text{H}^+ + 6\text{e}^- \rightleftharpoons 2\text{Cr}^{3+} + 7\text{H}_2\text{O}$	+1,33
$\text{Cl}_2(\text{g}) + 2\text{e}^- \rightleftharpoons 2\text{Cl}^-$	+1,36
$\text{MnO}_4^- + 8\text{H}^+ + 5\text{e}^- \rightleftharpoons \text{Mn}^{2+} + 4\text{H}_2\text{O}$	+1,51
$\text{H}_2\text{O}_2 + 2\text{H}^+ + 2\text{e}^- \rightleftharpoons 2\text{H}_2\text{O}$	+1,77
$\text{Co}^{3+} + \text{e}^- \rightleftharpoons \text{Co}^{2+}$	+1,81
$\text{F}_2(\text{g}) + 2\text{e}^- \rightleftharpoons 2\text{F}^-$	+2,87

Increasing oxidising ability/Toenemende oksiderende vermoë

Increasing reducing ability/Toenemende reduserende vermoë



Province of the
EASTERN CAPE
EDUCATION

**NATIONAL
SENIOR CERTIFICATE/
NASIONALE
SENIOR SERTIFIKAAT**

GRADE/GRAAD 11

NOVEMBER 2020

**PHYSICAL SCIENCES P2/
FISIESE WETENSKAPPE V2
MARKING GUIDELINE/NASIENRIGLYN
(EXEMPLAR/EKSEMPLAAR)**

MARKS/PUNTE: 150

This marking guideline consists of 12 pages./
Hierdie nasienriglyn bestaan uit 12 bladsye.

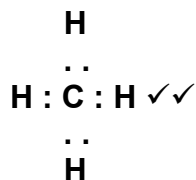
QUESTION 1/VRAAG 1

- 1.1 A ✓✓ (2)
 1.2 C ✓✓ (2)
 1.3 D ✓✓ (2)
 1.4 C ✓✓ (2)
 1.5 A ✓✓ (2)
 1.6 B ✓✓ (2)
 1.7 A ✓✓ (2)
 1.8 A ✓✓ (2)
 1.9 D ✓✓ (2)
 1.10 B ✓✓ (2)
- [20]**

QUESTION 2/VRAAG 2

- 2.1 The sharing of electrons between two atoms to form a molecule. ✓✓ /
 Die deel van elektrone tussen twee atome om 'n molekule te vorm. (2)

2.2



(2)

- 2.3 2.3.1 C – H. ✓ O-atom has a smaller atomic radius than the C-atom. ✓
 O-atom het 'n 2 kleiner atomiese radius as die C-atom.

OR/ OF

C-atom has a larger atomic radius than the O-atom.
 C-atom het 'n groter atomiese radius as die O-atom. (2)

- 2.3.2 O - H ✓ (1)

- 2.4 Two / Twee ✓ **OR/OF 2** (1)

- 2.5 NH_4^+ ✓ (1)

- 2.6 N-atom is more electronegative than the H-atom. ✓
The NH_3 molecular geometry/charge distribution is asymmetrical ✓ / The electron density (charges) will be distributed unevenly around the molecule.

N-atoom is meer elektron-negatief as die H-atoom

Die NH_3 se molekulêre geometrie/lading is asimmetries versprei /

Die elektrondigtheid (lading) sal oneweredig rondom die molekule versprei wees.

C-atom is more electronegative than the H-atom ✓ but CH_4 molecular geometry / charge distribution is symmetrical ✓

C-atoom is meer elektron-negatief as die H-atoom maar die CH_4 molekulêre geometrie/lading verspreiding is simmetries.

(4)
[13]

QUESTION 3/VRAAG 3

- 3.1 3.1.1 The temperature at which the vapour pressure of a liquid equals atmospheric pressure. ✓✓
Die temperatuur waarteen die dampdruk van 'n vloeistof gelyk aan die atmosferiese druk is. (2)
- 3.1.2 Gas ✓ (1)
- 3.1.3 Dipole-dipole ✓ (forces) / *Dipool-dipool (kragte)* (1)
- 3.1.4 **B** ✓
Compound **B** has larger molecular size ✓✓ / Compound **A** has a smaller molecular size
Verbinding B het 'n groter molekulêre grootte / Verbinding A het 'n kleiner molekulêre grootte. (3)
- 3.1.5 **A** ✓
Lower boiling point / ✓ *Laer kookpunt*

OR/OF

B has a higher boiling point / B het 'n hoër kookpunt (2)

- 3.1.6 Compound C/ HF has hydrogen bonds. ✓
HCl (A) and HBr (B) have dipole-dipole forces.

The hydrogen bonds / intermolecular forces in compound C / HF is stronger ✓ than the dipole-dipole forces / intermolecular forces in HCl (A) and HBr (B).

Therefore more energy will be required to overcome the intermolecular forces in HF (A). ✓

Verbinding C/HF het waterstofbindings.
HCl (A) en HBr (B) het dipool-dipoolkragte.

Die waterstofbinding/intermolekulêre kragte in verbinding C / HF is sterker as die die dipool-dipoolkragte/intermolekulêre kragte in HCl (A) en HBr (B).

Daarom word meer energie benodig om die intermolekulêre kragte in HF (A te oorkom).

OR/OF

Compound C / HF has hydrogen bonds. ✓
HCl (A) and HBr (B) have dipole-dipole forces.

The dipole-dipole forces / intermolecular forces in compounds HCl (A) and HBr (B) is weaker ✓ than the intermolecular forces in HF (C)

Therefore less energy will be required to overcome the intermolecular forces in HCl (A) and HBr (B). ✓

Verbinding C / HF het waterstofbindings
HCl (A) en HBr (B) het dipool-dipoolkragte

Die dipool-dipool/intermolekulêre kragte in verbindings HCl (A) en HBr (B) is swakker as die waterstofbinding/intermolekulêre kragte in HF (C).

Daarom word minder energie benodig om die intermolekulêre kragte in HCl (A) en HBr (B) te oorkom.

- 3.2 3.2.1 CCl₄ ✓ (1)

- 3.2.2 CCl₄ and I₂ have London forces only. ✓
H₂O has (London forces) and hydrogen bonds ✓
Intermolecular forces in solution are of comparable magnitude (CCl₄) ✓

OR IMF in solution are not of comparable magnitude (H₂O)

CCl₄ en I₂ het slegs Londenkragte

H₂O het (londenkragte) en waterstofbindings **OF**

Intermolekulêre kragte in oplossing is van vergelykbare grootte.

(3)
[16]

QUESTION 4/VRAAG 4

4.1 Charles' law ✓ / *Charles se wet* (1)

4.2 4.2.1 What effect will a change in temperature have on the volume of the gas? ✓✓/
What is the relationship between temperature and volume of gas?

Watter effek sal die verandering in temperatuur op die volume van die gas hê?

Wat is die verhouding tussen temperatuur en volume van die gas?

Marking guideline/Nasienriglyn

- Correct independent and dependent variable
- *Korrekte onafhanklike en afhanklike veranderlike*
- In the form of a question
- *In die vorm van 'n vraag*

(2)

4.2.2 Pressure OR the amount of gas.
Druk OF hoeveelheid gas
Any one/Enige een ✓

(1)

4.3 Thermometer/ *Termometer* ✓

(1)

4.4 4.4.1 $\frac{T_1}{V_1} = \frac{T_2}{V_2}$ ✓

$$\frac{269}{66} \checkmark = \frac{T_2}{67} \checkmark$$

$$T_2 = 273,08 \text{ K}$$

$$R = 273,08 \checkmark \text{ (K)}$$

(4)

4.4.2 $n = \frac{m}{M}$

$$n = \frac{132}{44} \checkmark$$

$$n = 3 \text{ mol}$$

$$pV = nRT \checkmark$$

$$p(66 \times 10^{-3}) \checkmark = (3)(8,31)(269) \checkmark$$

$$p = 101\,608,64 \text{ Pa} \checkmark$$

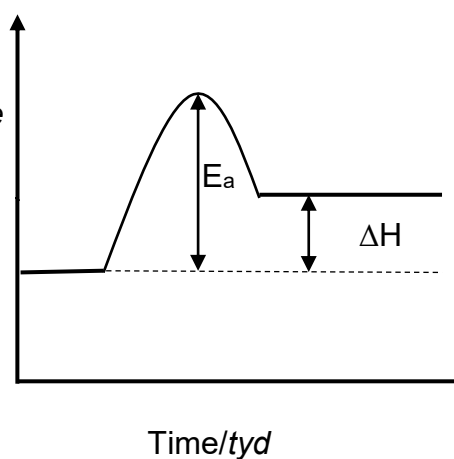
(5)

- 4.5 Low temperature ✓ and high pressure ✓ / *Lae temperatuur en hoë druk* (2)
- 4.6 H₂ ✓
H₂ has smaller molecules ✓ and weaker intermolecular forces ✓ /
H₂ het kleiner molekules en swakker intermolekulêrekrage. (3)

[19]**QUESTION 5/VRAAG 5**

- 5.1 The minimum energy needed for a reaction to take place. ✓✓ /
Die minimum energie wat benodig word vir 'n reaksie om plaas te vind. (2)
- 5.2 Reaction / *Reaksie I.* ✓
The temperature of the reaction mixture increases. ✓
Die temperatuur van die reaksiemengsel verhoog. (2)
- 5.3 NEGATIVE / *NEGATIEF* ✓ (1)
- 5.4 Catalyst / *Katalisator* ✓ (1)
- 5.5 LARGER THAN / *GROTER AS* ✓✓ (2)

- 5.6 Potential energy (kJ·mol⁻¹) / *Potensiële energie (kJ·mol⁻¹)*

**Marking criteria / Nasienkriteria**

Correct shape ✓
Korrekte vorm

ΔH correctly indicated ✓
ΔH korrek aangedui

E_a correctly indicated ✓
E_a korrek aangedui

(3)
[11]

QUESTION 6/VRAAG 6

6.1 6.1.1 The simplest whole number ratio of elements in a given compound ✓✓ /
Die eenvoudigste heelgetalverhouding van elemente in 'n gegewe verbinding (2)

$$6.1.2 \quad n(\text{C}) = \frac{m}{M} \checkmark$$

$$n(\text{C}) = \frac{54,55}{12} \checkmark = 4,55 \text{ mol}$$

$$n(\text{H}) = \frac{9,09}{1} \checkmark = 9,09 \text{ mol}$$

$$n(\text{O}) = \frac{36,36}{16} \checkmark = 2,27 \text{ mol}$$

$$n(\text{C}) : n(\text{H}) : n(\text{O})$$

$$\frac{4,55}{2,27} : \frac{9,09}{2,27} : \frac{2,27}{2,27} \checkmark$$

$$2 : 4 : 1$$

Empirical formula / *Empiriese formule*: $\text{C}_2\text{H}_4\text{O}_1 \checkmark$ (6)

$$6.1.3 \quad \text{Ratio / Verhouding} = \frac{\text{molar mass/molêre massa}}{\text{formula mass/formule massa}}$$

$$\text{Ratio / verhouding} = \frac{88}{44} \checkmark$$

$$\text{Ratio / verhouding} = 2$$

Molecular formula / *Molekulêre formule*: $\text{C}_4\text{H}_8\text{O}_2 \checkmark$ (2)

6.2 6.2.1 The amount of solute per litre/volume of solution ✓✓ /
Die hoeveelheid opgeloste stof per liter/volume van oplossing (2)

$$6.2.2 \quad c = \frac{m}{MV} \checkmark$$

$$c = \frac{8}{(40)\checkmark(0,25)} \checkmark$$

$$c = 0,8 \text{ mol} \cdot \text{dm}^{-3} \checkmark$$

$$n = m/M \\ = 8/40 \checkmark \\ = 0,2 \text{ mol}$$

$$c = n/V \\ = 0,2/0,25 \checkmark \\ = 0,8 \text{ mol} \cdot \text{dm}^{-3} \checkmark$$

for both formulae/
vir beide formules

Marking guide / Nasienriglyn

- Formula / Formule $\checkmark \checkmark$
- Substitution of / substitusie van 8 and / en 0,25 or/ of 0,2 and 0,25
- Substitution of / substitusie van 40/
- Final answer / Finale antwoord \checkmark

(4)

6.3 NaN_3

$$n = \frac{m}{M}$$

$$n = \frac{55}{65} \checkmark$$

$$n = 0,85 \text{ mol}$$

Mole ratio / molverhouding: $\text{NaN}_3 : \text{N}_2$

$$2 : 3 \\ n(\text{N}_2) = 0,85 \times \frac{3}{2} \checkmark$$

$$n(\text{N}_2) = 1,275 \text{ mol}$$

$$V = nV_m$$

$$V = (1,275)(22,4) \checkmark$$

$$V = 28,56 \text{ dm}^3 \checkmark$$

Any one / Enige een \checkmark

(5)
[21]

QUESTION 7/VRAAG 7

7.1 The substance that is completely used-up in a chemical reaction. ✓✓ /
Die stof wat volledig in 'n chemiese reaksie opgebruik word.

(2)

7.2

H_2SO_4 $n = \frac{m}{M} \checkmark$ $n = \frac{2000}{98} \checkmark$ $n = 20,41 \text{ mol}$	
<p>Mole ratio / mol verhouding = $\frac{\text{H}_2\text{SO}_4}{\text{NH}_3}$</p> <p>Mole ratio / mol verhouding = $\frac{1}{2} = 0,5 \checkmark$</p> <p>Mole ratio / mol verhouding = $\frac{20,41}{58,82} \checkmark = 0,34$</p> <p>Ratio smaller than / Verhouding kleiner as 0,5.</p>	<p>OR / OF</p> <p>Mole ratio / mol verhouding = $\frac{\text{NH}_3}{\text{H}_2\text{SO}_4}$</p> <p>Mole ratio / mol verhouding = $\frac{2}{1} = 2$</p> <p>Mole ratio / mol verhouding = $\frac{58,82}{20,41} = 2,88$</p> <p>Ratio greater than / Verhouding groter as 2.</p>
<p>H_2SO_4 is the limiting reagent / H_2SO_4 is die beperkende reagens.</p>	

$$n[(\text{NH}_4)_2\text{SO}_4] = 20,41 \times \frac{1}{1} = 20,41 \checkmark$$

$$m = nM$$

$$m = (20,41)(132) \checkmark$$

$$m = 2\,667,72 \text{ g} \checkmark$$

(7)
[9]

QUESTION 8/VRAAG 8

8.1 8.1.1 A base is a proton/ H^+ ion acceptor. ✓✓ /
'n Basis is 'n protoon/ H^+ ioon-aanvaarder (2)

8.1.2 HPO_4^{2-} and/en PO_4^{3-} ✓ **OR/OF** H_3O^+ and/en H_2O (1)

8.1.3 ACIDIC / SUUR. ✓
 (Excess)/ (Oormaat) H_3O^+ ✓ are produced / word geproduseer. (2)

8.1.4 HPO_4^{2-} ✓✓ (2)

8.2 $CuO + 2HNO_3 \checkmark \longrightarrow Cu(NO_3)_2 + H_2O \checkmark$ ✓Balancing / Balansering

Marking guide/ Nasionriglyn

- Reactants / Reaktante
- Products / Produkte
- Balancing / Balansering

(3)

8.3 8.3.1

Marking guide / Nasionriglyn

- Formula / Formule $n = cV$
- Substitution into / Substitusie in $n = cV$
- Ratio / Verhouding $CaCO_3 : H_2SO_4 : CO_2 : H_2SO_4$
- Formula / Formule $n = m/M$
- Substitution / Substitusie of 100 into $n = m/M$
- Calculation of / Berekening van % Purity / Suiwerheid
- Final answer / Finale antwoord

n_{acid} reacting / suur wat reageer het = cV ✓

= $1,5 \times 200/1000$ ✓

= 3 mol

$M(CaCO_3)$ used / gebruik = nM ✓

= 3×100 ✓

= 30 g



% Purity/ Suiwerheid = $m_{pure/suiwer}/m_{impure/onsuiwer} \times 100$

= $30/40 \times 100$ ✓

= 75% ✓

(6)

8.3.2 $c_1V_1 = c_2V_2$

9×10 ✓ = $1,5$ ✓V

$60 \text{ cm}^3 = V_{\text{solution / oplossing}}$

$V_{\text{water}} = 60 - 10$ ✓

= 50 cm^3 ✓

(4)

[20]

QUESTION 9/VRAAG 9

9.1 9.1.1 Loss of electrons ✓✓ / *Verlies van elektrone* (2)

9.1.2 Zn ✓✓ (2)

9.1.3 $\text{Fe}^{3+} + \text{e}^- \rightarrow \text{Fe}^{2+}$ ✓✓ (2)

9.2 9.2.1 + 5 ✓✓ (2)

9.2.2 $\text{Ag (s)} \rightarrow \text{Ag}^+ \text{(aq)} + \text{e}^-$ ✓

$\text{NO}_3^- \text{(aq)} + 2 \text{H}^+ + \text{e}^- \rightarrow \text{NO}_2 \text{(g)} + \text{H}_2\text{O}$ ✓

$\text{Ag (s)} + \text{NO}_3^- \text{(aq)} + 2 \text{H}^+ \rightarrow \text{Ag}^+ \text{(aq)} + \text{NO}_2 \text{(g)} + \text{H}_2\text{O}$ ✓✓

Marking guideline/ Nasienriglyn

Correct oxidation half reaction / *Korrekte oksidasie halfreaksie*

Correct reduction half reaction / *Korrekte reduksie halfreaksie*

Final reaction correct / *Finale reaksie korrek*

Balanced / *Gebalanseerd*

(4)
[12]

QUESTION 10/VRAAG 10

10.1 10.1.1 Witwatersrand ✓ (1)

10.1.2 Reduced ✓ / *Gereduseer/verminder*

Oxidation number (of Au) decreases ✓✓ (from +1 to 0) /
Oksidasiegetal (van Au) verlaag (vanaf +1 tot 0) (3)

10.1.3 NaCN is harmful as it is poisonous to humans ✓✓ /
NaCN is skadelik omdat dit giftig is vir mense (2)

10.1.4 Smelting ✓ (1)

10.2 10.2.1 Release of greenhouse gas / CO_2 / Global warming ✓
Air pollutions/toxins released into air. ✓

*Vrystelling van kweekhuisgas / CO_2 / Aardverwarming /
Lugbesoedeling / gifstowwe wat in die lug vrygestel word.* (2)
[9]

TOTAL/TOTAAL: 150

