



Province of the
EASTERN CAPE
EDUCATION

**NATIONAL
SENIOR CERTIFICATE**

GRADE 10

NOVEMBER 2019

TECHNICAL SCIENCES P2

MARKS: 150

TIME: 3 hours



This question paper consists of 16 pages, including a graph sheet
and 2 data sheets.

INSTRUCTIONS AND INFORMATION

1. Answer ALL the questions in the ANSWER BOOK.
2. Start EACH question on a NEW page in the ANSWER BOOK.
3. Number the answers correctly according to the numbering system used in this question paper.
4. You may use a non-programmable calculator.
5. LEAVE a line open between subsections, i.e. QUESTION 2.1 and QUESTION 2.2.
6. You are advised to use the attached DATA SHEETS.
7. Show ALL formulae and substitutions in ALL calculations.
8. Round off your final numerical answers to a minimum of TWO decimal places.
9. Give brief motivations, discussions, etc. where required.
10. Write neatly and legibly.

QUESTION 1: MULTIPLE-CHOICE QUESTIONS

Various options are provided as possible answers to the following questions. Choose the answers and write only the letter (A–D) next to the question number (1.1–1.10) in the ANSWER BOOK, for example 1.11 E.

1.1 Which ONE of the following is considered as a non-metal property?

- A It conducts heat
 - B It breaks easily
 - C It has a dull colour
 - D It conducts electricity
- (2)

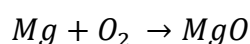
1.2 Which ONE of the following is an element?

- A Ice
 - B Salt
 - C Water
 - D Nitrogen
- (2)

1.3 A student has a container filled with iron pieces and plastic pieces. In order to collect the iron pieces, which of the following apparatus must be used?

- A Spoon
 - B Paper
 - C Tweezers
 - D Bar magnet
- (2)

1.4 Given the following equation:



Balance the equation if NOT balanced.
How many Mg moles will react with O₂?

- A 1
 - B 2
 - C 4
 - D 3
- (2)

1.5 In which group on the periodic table will you find alkali metals?

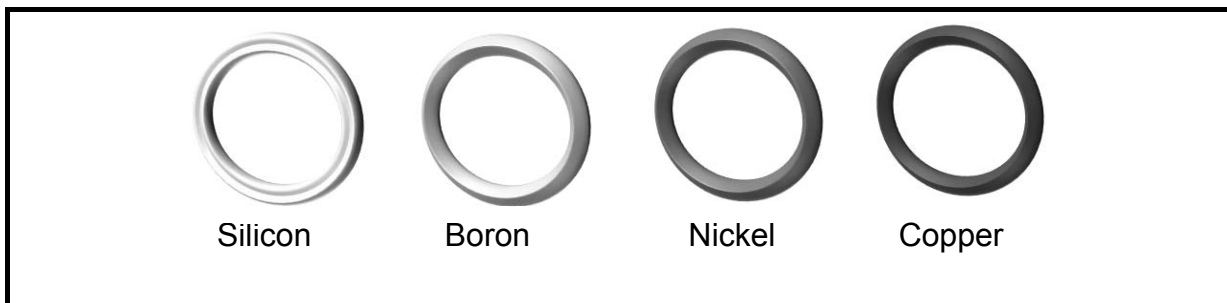
- A Group 1
 - B Group 2
 - C Group 3
 - D Group 4
- (2)

- 1.6 Which ONE of the following defines heat?
- A It has mass
 - B SI unit Joules
 - C Is a form of energy
 - D Indication of how hot or cold a body is
- (2)
- 1.7 An element that changes from an atom to ANION, when it accepts an electron.
- A Boron
 - B Lithium
 - C Nitrogen
 - D Potassium
- (2)
- 1.8 The mass number of an element is the number of ...
- A electrons.
 - B protons and electrons.
 - C protons and neutrons.
 - D electrons and neutrons.
- (2)
- 1.9 The correct chemical formula for sodium carbonate is ...
- A Na_2CO .
 - B Na_2CO_3 .
 - C Na_2CO_2 .
 - D Na_3CO_3 .
- (2)
- 1.10 A good example of a semiconductor (metalloid) is ...
- A silicon.
 - B silver.
 - C sulphur.
 - D sodium.
- (2)

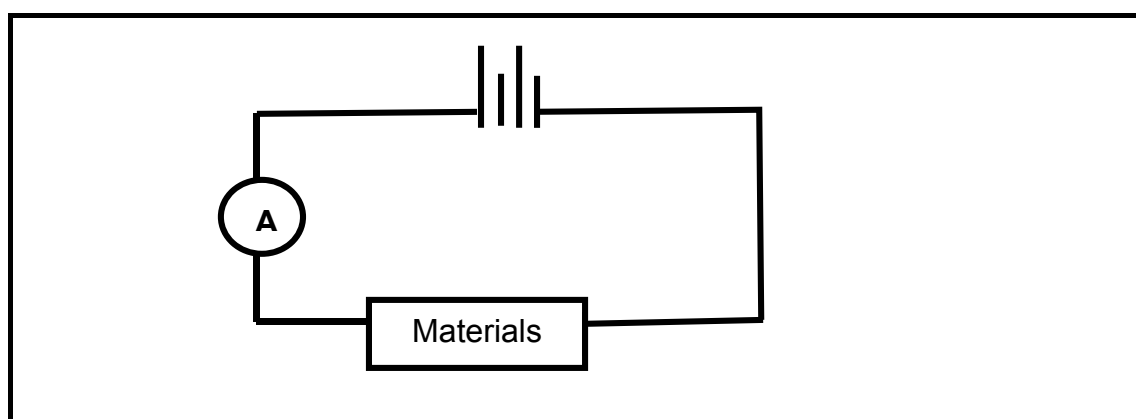
[20]

QUESTION 2 (Start on a NEW page.)

A learner is in possession of four types of rings.



- 2.1 Which of the rings:
 - 2.1.1 Are metals? (2)
 - 2.1.2 Are semiconductors? (2)
- 2.2 Silicon is an example of a thermal insulator.
Answer only YES or NO. (1)
- 2.3 Name TWO properties of non-metals. (2)
- 2.4 The copper ring is placed outside in open air and reacts with oxygen.
Write down the BALANCED EQUATION for the reaction. (4)
- 2.5 Furthermore, the learner takes these rings with two other unknown materials (Material **A** and Material **B**) and d. The learner connects all these materials one by one in a circuit as shown below:



After the investigation is completed, the following results were obtained:

MATERIAL	CURRENT
Nickel	0,6
Copper	0,8
Boron	0,2
Silicon	0,1
Material A	0,01
Material B	0,00

2.5.1 Which material is a WEAK conductor? (1)

2.5.2 Explain, what it means when material **B** has a zero reading. (2)

2.5.3 For this investigation, write down the controlled variable. (1)

2.5.4 What is the aim of this investigation? (2)

2.6 After the investigation has been conducted, the learner clears the desk and accidentally puts all the materials together in one bag with iron and a second bar magnet. The learner was advised that all materials should be separated according to magnetic and non-magnetic. The learner uses a bar magnet to separate the materials.

2.6.1 Redraw the table below in your ANSWER BOOK. Write the relevant answer next to the material.

MATERIALS	REPELLED OR ATTRACTED
Copper	
Silicon	
Boron	
Nickel	
Material A	
Material B	
Iron	
Second bar magnet	

(8 x 1) (8)

2.6.2 All the metals in this bag have magnetic properties.

Write only TRUE or FALSE.

(1)
[26]

QUESTION 3 (Start on a NEW page.)

Carbon is an element that is found in abundance in the earth's crust. Carbon is mainly used as coal and in diamond rings.



3.1 Define the following terms:

3.1.1 Element (2)

3.1.2 Valence electrons (2)

3.2 What is the NAME of the product formed when carbon is released in the atmosphere and reacts with oxygen? (2)

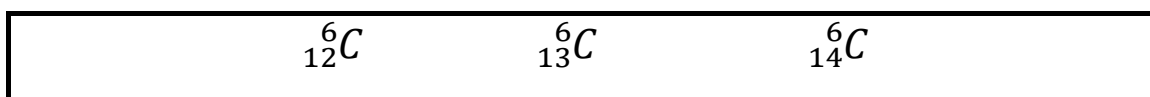
3.3 Write down the Aufbau-diagram of an OXYGEN ion. (3)

3.4 Which energy levels are core electrons situated in a structure of an atom? Write down ONLY the word, HIGHEST or LOWEST. (1)

3.5 Write down the number of valence electrons in a CARBON atom. (1)

3.6 Write down the spectroscopic electron configuration (s-p notation) for a CARBON atom. (3)

3.7 Consider the following isotopes of a carbon atom.



3.7.1 Define the term *isotopes*. (2)

3.7.2 Write down the charge of an electron in the atom. (1)

3.7.3 Write down the name(s) of the particle(s) that are found in the nucleus of an atom. (2)






3.7.4 Study the table below. Redraw the table in your ANSWER BOOK and write the relevant answers represented by (a) to (f).

Isotope	No. of neutrons	No. of electrons	No. of protons
${}^6_{12}\text{C}$	6	(a)	(e)
${}^6_{13}\text{C}$	(b)	6	(f)
${}^6_{14}\text{C}$	(c)	(d)	6

(6)
[25]

QUESTION 4 (Start on a NEW page.)

Study the given key table for the following elements and use it to answer questions below.

Element	Key	Element	Key
H		Cl	
N		Mg	
O			

4.1 Define the following terms:

4.1.1 Compound (2)

4.1.2 Atomic number (2)

4.2 Draw structures of the molecules from the following compounds by using only the KEYS from the table.

4.2.1 H₂ (2)

4.2.2 NH₃ (2)

4.2.3 MgCl₂ (2)

4.3 Catalytic converters are used to reduce air pollution. Study the diagram below by using the key table above.



4.3.1 Complete the equation given above by writing the structure of the KEY molecule formed represented by the letter X. (2)

4.3.2 Write down the balanced chemical equation by replacing the KEYS with ELEMENTS. (3)

4.3.3 Where does the gas that causes air pollution originate from? (2)

4.4 Write down the names of the following compounds:

4.4.1 CaCO₃ (2)

4.4.2 FeO (2)

4.5 Rewrite the following in your ANSWER BOOK and correct the chemical formulae, where necessary:

4.5.1 LiSO_4 (1)

4.5.2 AlOH (1)

4.6 Write the formula of the given compounds:

4.6.1 Magnesium oxide (2)

4.6.2 Copper (II) carbonate (2)

4.7 Complete and balance the following equations by writing chemical formulae:

Ammonium ions + Phosphate ions \rightarrow (3)

[30]

QUESTION 5 (Start on a NEW page.)

A Grade 10 learner is given five different substances in a laboratory. The substances are labelled from Substance 1 to 5.

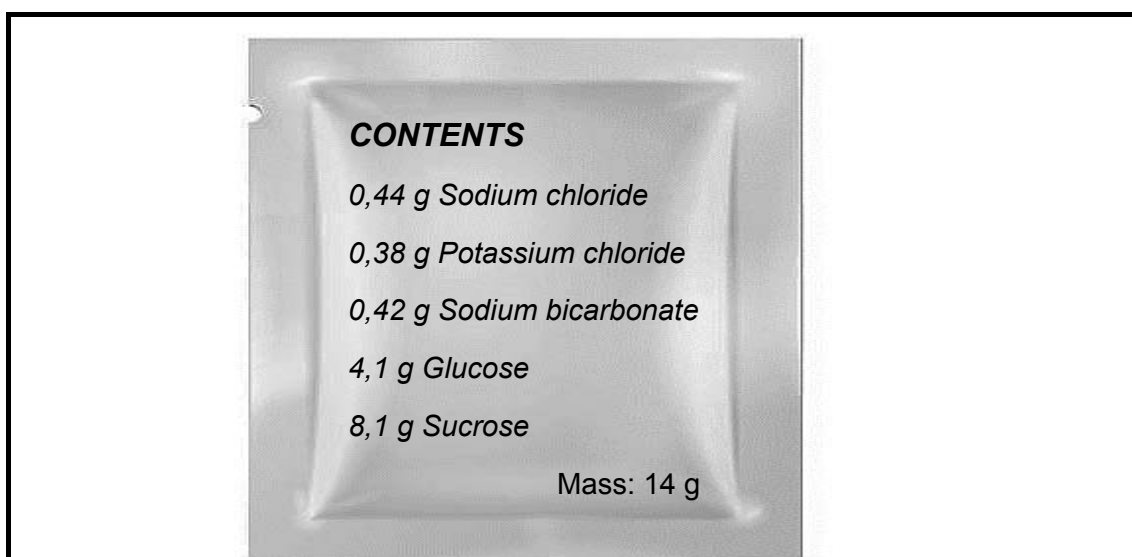
Substance 1: Water
Substance 2: Chlorine
Substance 3: Beryllium
Substance 4: Copper nitrate
Substance 5: Sulphur dioxide

- 5.1 Define the term *pure substance*. (2)
- 5.2 Rewrite substance 1 to 5 in your ANSWER BOOK and next to it write whether the substance is an ELEMENT or a COMPOUND. (5)
- 5.3 Write down an equation by writing the chemical formula for the ions that are formed when substance 4 is dissolved in water. (3)
- 5.4 Redraw and complete the table with the use of the periodic table provided at the back of the question paper. Write the relevant answers next to the letters (a) to (f) given in the table.

Substances	Group number	Period number	Group name
2	(a)	(c)	(e)
3	(b)	(d)	(f)

(6)

- 5.5 Here follows information regarding the contents of a 14 g rehydration sachet:

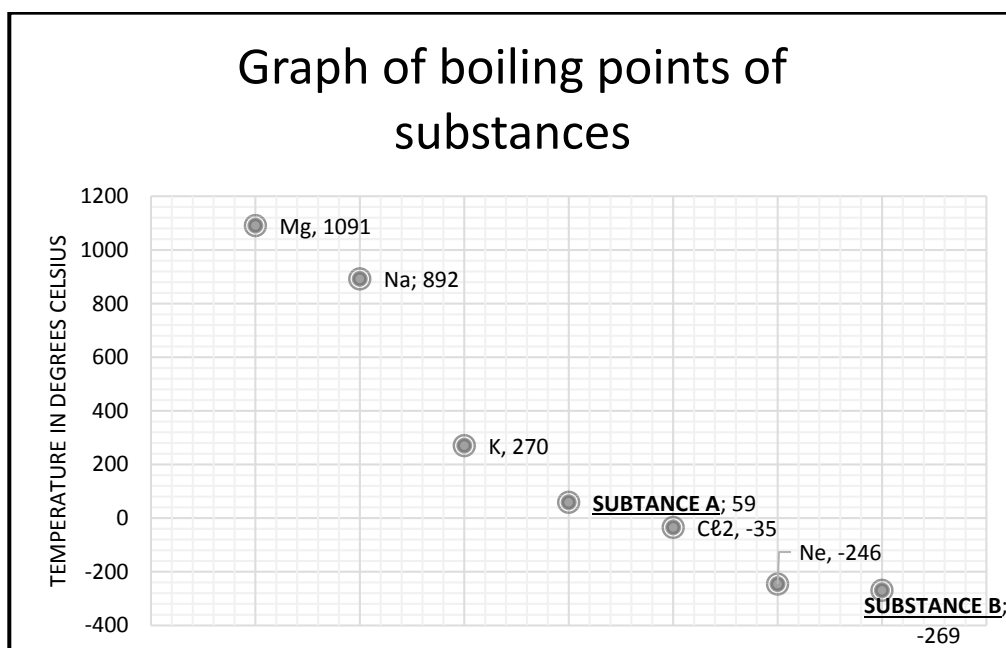


- 5.5.1 Which names from the listed contents have common names? (2)
- 5.5.2 Write down the chemical formulae for potassium chloride. (2)
- 5.5.3 Identify the anion and cation in sodium chloride. (2)

[22]

QUESTION 6 (Start on a NEW page.)

Here follows a graph of the boiling points of different substances. Two substances are unknown and are marked as Substance **A** and Substance **B**.

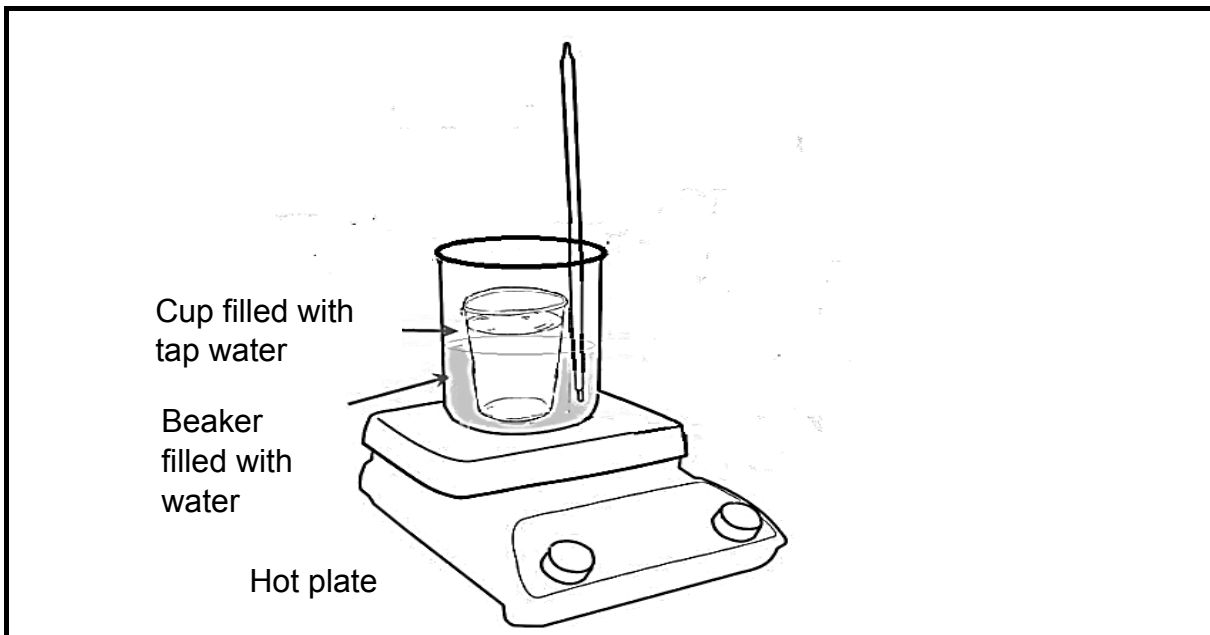


- 6.1 Which substance has the highest boiling point? (1)
- 6.2 Write down the chemical name of the substance with a boiling point of -246 degrees. (1)
- 6.3 What does it mean when substances read a negative boiling point? (2)
- 6.4 With the help of the attached periodic table, substance **A** and substance **B** were identified from the graph. Write down the name of:
- 6.4.1 Substance **A**, a non-metal with an atomic number of 35 (1)
- 6.4.2 Substance **B**, a gas that is lighter than light and used to fill balloons (1)
- 6.5 What is the GROUP NAME given to the elements Ne and Substance **B** where they are located on the periodic table? (1)

[7]

QUESTION 7 (Start on a NEW page.)

A lab assistant has been given the task to do an investigation to see which cup is the best insulator for boiling water. Two cups have been given to the assistant.



- Water is placed into a large beaker and placed on a hot plate that is switched on at highest setting.
- **Cup A** is filled with normal tap water and the initial temperature is taken.
- The cup is placed inside the beaker.
- A mass piece is placed in the cup.
- Temperature readings are taken every 90 seconds and recorded on a table.
- The same procedure is done for **Cup B**.

The results are tabulated as follows:

Time (in seconds)	Temperature (in °C)	
	Cup A	Cup B
0	17	20
1,5	21	55
3	27	75
4,5	30	84
6	33	89
7,5	36	QUESTION 7.3.2
9	QUESTION 7.3.1	89
10,5	43	88
12	44	87
13,5	46	86

7.1 Name the apparatus used to obtain readings on temperature(heat) and time. (2)

7.2 Calculate the difference in temperature in Cup **A** and Cup **B** using the following formula:

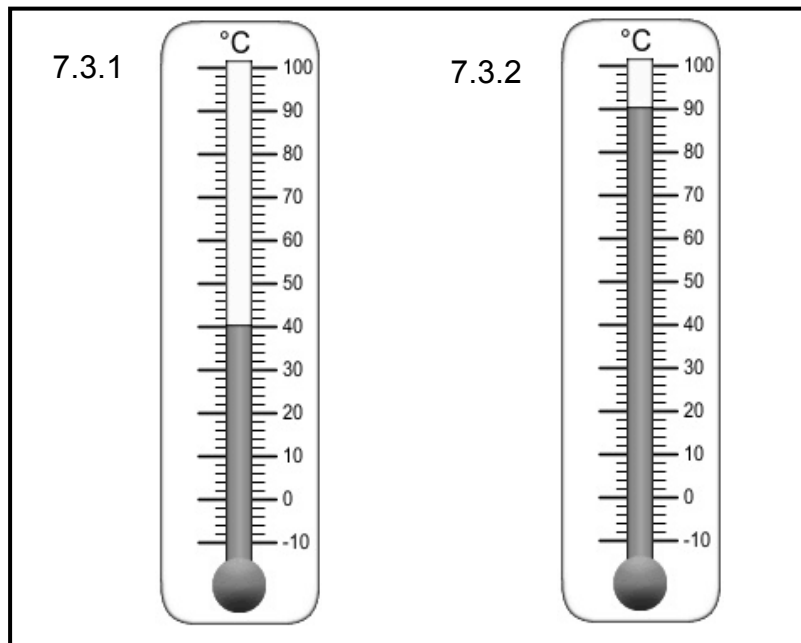
$$\Delta T = T_f - T_i$$

Where T_f is the final temperature

T_i is the initial temperature.

(4)

7.3 Studying the apparatus below. Write down the temperature readings in your ANSWER BOOK next to QUESTION 7.3.1 and QUESTION 7.3.2.



(2)

7.4 Convert the above temperature readings from degrees Celsius to Kelvin. (4)

7.5 Give the names of TWO other devices that are used to measure temperature. (2)

7.6 Use the attached graph paper to answer QUESTION 7.6.

Draw a graph of Temperature against Time of cup **A** ONLY up to 7,5 seconds. (5)

7.7 In this investigation, what was the source of heat used to increase the temperature? (1)

[20]

TOTAL: 150

**NATIONAL SENIOR CERTIFICATE
NASIONALE SENIOR SERTIFIKAAT**

**DATA FOR TECHNICAL SCIENCES GRADE 10
PAPER 2 (CHEMISTRY)**

**GEGEWENS VIR TEGNIESE WETENSKAPPE GRAAD 10
VRAESTEL 2 (CHEMIE)**

TABLE 1: PHYSICAL CONSTANTS/TABEL 1: FISIESE KONSTANTES

NAAM/NAME	SIMBOOL/SYMBOL	WAARDE/VALUE
Standard pressure <i>Standaarddruk</i>	p^θ	$1,013 \times 10^5 \text{ Pa}$
Molar gas volume at STP <i>Molêre gasvolume teen STD</i>	V_m	$22,4 \text{ dm}^3 \cdot \text{mol}^{-1}$
Standard temperature <i>Standaardtemperatuur</i>	T^θ	273 K
Charge on electron <i>Lading op elektron</i>	e	$-1,6 \times 10^{-19} \text{ C}$
Avogadro's constant <i>Avogadro se konstante</i>	N_A	$6,02 \times 10^{23} \text{ mol}^{-1}$

TABLE 2: FORMULAE/TABEL 2: FORMULES

$n = \frac{m}{M}$	$n = \frac{N}{N_A}$
$c = \frac{n}{V}$ OR $c = \frac{m}{MV}$	$n = \frac{V}{V_m}$
$\frac{p_1 V_1}{T_1} = \frac{p_2 V_2}{T_2}$	$pV = nRT$

TABLE 3: THE PERIODIC TABLE OF ELEMENTS/TABEL 3: DIE PERIODIEKE TABEL VAN ELEMENTE

		1	2	3	4	5	6	7	8	9	10	11	12	13	14	15	16	17	18																																																																																																																																																																																																																																																																																																																																																																																																																																																																																																																																																																																																																																																																																																																																																																																																																																																																																																																																																																																																																			
		(I)	(II)	KEY/ SLEUTEL																	(VII)	(VIII)																																																																																																																																																																																																																																																																																																																																																																																																																																																																																																																																																																																																																																																																																																																																																																																																																																																																																																																																																																																																																
		Atoomgetal																			(V)	(VI)	(VII)	(VIII)																																																																																																																																																																																																																																																																																																																																																																																																																																																																																																																																																																																																																																																																																																																																																																																																																																																																																																																																																																																																														
		Atomic number																			(V)	(VI)	(VII)	(VIII)																																																																																																																																																																																																																																																																																																																																																																																																																																																																																																																																																																																																																																																																																																																																																																																																																																																																																																																																																																																																														
		Elektronegatiwiteit																			(V)	(VI)	(VII)	(VIII)																																																																																																																																																																																																																																																																																																																																																																																																																																																																																																																																																																																																																																																																																																																																																																																																																																																																																																																																																																																																														
		Electronegativity																			(V)	(VI)	(VII)	(VIII)																																																																																																																																																																																																																																																																																																																																																																																																																																																																																																																																																																																																																																																																																																																																																																																																																																																																																																																																																																																																														
		Simbool																			(V)	(VI)	(VII)	(VIII)																																																																																																																																																																																																																																																																																																																																																																																																																																																																																																																																																																																																																																																																																																																																																																																																																																																																																																																																																																																																														
		Symbol																			(V)	(VI)	(VII)	(VIII)																																																																																																																																																																																																																																																																																																																																																																																																																																																																																																																																																																																																																																																																																																																																																																																																																																																																																																																																																																																																														
		Benaderde relatiewe atoommassa																			(V)	(VI)	(VII)	(VIII)																																																																																																																																																																																																																																																																																																																																																																																																																																																																																																																																																																																																																																																																																																																																																																																																																																																																																																																																																																																																														
1	H	1	3	Li	4	Be	7	9	11	12	13	14	15	16	17	18	19	20	21	22	23	24	25	26	27	28	29	30	31	32	33	34	35	36	37	38	39	40	41	42	43	44	45	46	47	48	49	50	51	52	53	54	55	56	57	58	59	60	61	62	63	64	65	66	67	68	69	70	71	72	73	74	75	76	77	78	79	80	81	82	83	84	85	86	87	88	89	90	91	92	93	94	95	96	97	98	99	100	101	102	103	104	105	106	107	108	109	110	111	112	113	114	115	116	117	118	119	120	121	122	123	124	125	126	127	128	129	130	131	132	133	134	135	136	137	138	139	140	141	142	143	144	145	146	147	148	149	150	151	152	153	154	155	156	157	158	159	160	161	162	163	164	165	166	167	168	169	170	171	172	173	174	175	176	177	178	179	180	181	182	183	184	185	186	187	188	189	190	191	192	193	194	195	196	197	198	199	200	201	202	203	204	205	206	207	208	209	210	211	212	213	214	215	216	217	218	219	220	221	222	223	224	225	226	227	228	229	230	231	232	233	234	235	236	237	238	239	240	241	242	243	244	245	246	247	248	249	250	251	252	253	254	255	256	257	258	259	260	261	262	263	264	265	266	267	268	269	270	271	272	273	274	275	276	277	278	279	280	281	282	283	284	285	286	287	288	289	290	291	292	293	294	295	296	297	298	299	300	301	302	303	304	305	306	307	308	309	310	311	312	313	314	315	316	317	318	319	320	321	322	323	324	325	326	327	328	329	330	331	332	333	334	335	336	337	338	339	340	341	342	343	344	345	346	347	348	349	350	351	352	353	354	355	356	357	358	359	360	361	362	363	364	365	366	367	368	369	370	371	372	373	374	375	376	377	378	379	380	381	382	383	384	385	386	387	388	389	390	391	392	393	394	395	396	397	398	399	400	401	402	403	404	405	406	407	408	409	410	411	412	413	414	415	416	417	418	419	420	421	422	423	424	425	426	427	428	429	430	431	432	433	434	435	436	437	438	439	440	441	442	443	444	445	446	447	448	449	450	451	452	453	454	455	456	457	458	459	460	461	462	463	464	465	466	467	468	469	470	471	472	473	474	475	476	477	478	479	480	481	482	483	484	485	486	487	488	489	490	491	492	493	494	495	496	497	498	499	500	501	502	503	504	505	506	507	508	509	510	511	512	513	514	515	516	517	518	519	520	521	522	523	524	525	526	527	528	529	530	531	532	533	534	535	536	537	538	539	540	541	542	543	544	545	546	547	548	549	550	551	552	553	554	555	556	557	558	559	560	561	562	563	564	565	566	567	568	569	570	571	572	573	574	575	576	577	578	579	580	581	582	583	584	585	586	587	588	589	590	591	592	593	594	595	596	597	598	599	600	601	602	603	604	605	606	607	608	609	610	611	612	613	614	615	616	617	618	619	620	621	622	623	624	625	626	627	628	629	630	631	632	633	634	635	636	637	638	639	640	641	642	643	644	645	646	647	648	649	650	651	652	653	654	655	656	657	658	659	660	661	662	663	664	665	666	667	668	669	670	671	672	673	674	675	676	677	678	679	680	681	682	683	684	685	686	687	688	689	690	691	692	693	694	695	696	697	698	699	700	701	702	703	704	705	706	707	708	709	710	711	712	713	714	715	716	717	718	719	720	721	722	723	724	725	726	727	728	729	730	731	732	733	734	735	736	737	738	739	740	741	742	743	744	745	746	747	748	749	750	751	752	753	754	755	756	757	758	759	760	761	762	763	764	765	766	767	768	769	770	771	772	773	774	775	776	777	778	779	780	781	782	783	784	785	786	787	788	789	790	791	792	793	794	795	796	797	798	799	800	801	802	803	804	805	806	807	808	809	810	811	812	813	814	815	816	817	818	819	820	821	822	823	824	825	826	827	828	829	830	831	832	833	834	835	836	837	838	839	840	841	842	843	844	845	846	847	848	849	850	851	852	853	854	855	856	857	858	859	860	861	862	863	864	865	866	867	868	869	870	871	872	873	874	875	876	877	878	879	880	881	882	883	884	885	886	887	888	889	890	891	892	893	894	895	896	897	898	899	900	901	902	903	904	905	906	907	908	909	910	911	912	913	914	915	916	917	918	919	920	921	922	923	924	925	926	927	928	929	930	931	932	933	934	935	936	937	938	939	940	941	942	943	944	945	946	947	948	949	950	951	952	953	954	955	956	957	958	959	960	961	962	963	964	965	966	967	968	969	970	971	972	973	974	975	976	977	978	979	980	981	982	983	984	985	986	987	988	989	990	991	992	993	994	995	996	997	998	999	1000

USE GRAPH PAPER TO ANSWER QUESTION 7.6

NAME AND SURNAME: _____

